

MADINAH ISLAMIC JUNIOR SCH, NSANGI
RECESS WORK TERM I 2020
PRIMARY TWO LITERACY I

Name: _____





1. _____ is the state of the atmosphere recorded a short period of time

Draw these elements of weather

Rain fall	Sun. shine	Cloud cover	wind

_____ is the main natural source of water

Name these other sources of water

Well tap river lake

Tick the uses of water

- | | | |
|--------------|--------------|--------------------|
| for fighting | for drinking | for watering crops |
| for cooking | for washing | for playing |

Draw these things we use to trap rain water .

bucket	tank	basin

2. _____ is the movement of people and their goods from one place to another

3. Draw these means of transport

car	bus	lorry	aeroplane

4. Match means of transport to where they are found

Taxi

stage

Bus

railway station

Aero plane

taxi park

Train

bus park

Motor cvcle

air port

5. Use the words in the box to fill in

Conductor, pilot driver cyclist, captain bursar

6. _____ collects money at school
7. _____ flies an aero plane
8. _____ moves a train
9. _____ collects money in a taxi
10. _____ ride a bicycle/motor cycle
11. What are domestic animals?

12. Give two examples of domestic animals

i) _____ ii) _____

13. Give two things we get from animals

i) _____ ii) _____

14. Match animals to their homes

Lion	sty
Dog	house
Cow	den
frog	kennel
man	kraal
pig	water

15. Draw these things we make from animals hides

Drum	bag	shoes	belt

16. Name these parts on a plant



Roots
Leaves
stem

17. Match people to their tools

